

Write your name here

Surname	Other names
---------	-------------

**Pearson Edexcel**  
International  
Advanced Level

Centre Number	Candidate Number
<input type="text"/> <input type="text"/> <input type="text"/> <input type="text"/> <input type="text"/> <input type="text"/>	<input type="text"/> <input type="text"/> <input type="text"/> <input type="text"/> <input type="text"/>

**Chemistry**  
**Advanced**  
**Unit 5: General Principles of Chemistry II – Transition Metals and Organic Nitrogen Chemistry (including synoptic assessment)**

Friday 20 January 2017 – Morning <b>Time: 1 hour 40 minutes</b>	Paper Reference <b>WCH05/01</b>
--	------------------------------------

<b>You must have: Data Booklet</b>	Total Marks
<b>Candidates may use a calculator.</b>	

### Instructions

- Use **black** ink or **black** ball-point pen.
- **Fill in the boxes** at the top of this page with your name, centre number and candidate number.
- Answer **all** questions.
- Answer the questions in the spaces provided – *there may be more space than you need.*

### Information

- The total mark for this paper is 90.
- The marks for **each** question are shown in brackets – *use this as a guide as to how much time to spend on each question.*
- Questions labelled with an **asterisk** (\*) are ones where the quality of your written communication will be assessed – *you should take particular care with your spelling, punctuation and grammar, as well as the clarity of expression, on these questions.*
- A Periodic Table is printed on the back cover of this paper.

### Advice

- Read each question carefully before you start to answer it.
- Keep an eye on the time.
- Try to answer every question.
- Check your answers if you have time at the end.

Turn over ►

P48373A

©2017 Pearson Education Ltd.  
6/6/5/1/1/



## SECTION A

Answer ALL the questions in this section. You should aim to spend no more than 20 minutes on this section. For each question, select one answer from A to D and put a cross in the box . If you change your mind, put a line through the box  and then mark your new answer with a cross .

1 Which set of successive ionisation energies, in  $\text{kJ mol}^{-1}$ , could **not** be for a transition element?

- A 653 1592 2987 4740
- B 658 1310 2653 4175
- C 759 1561 2958 5290
- D 900 1757 14849 21007

(Total for Question 1 = 1 mark)

2 The bonding **within** the complex ion,  $[\text{Cu}(\text{H}_2\text{O})_6]^{2+}$  is

- A covalent and dative covalent only.
- B covalent, dative covalent and ionic.
- C covalent only.
- D dative covalent only.

(Total for Question 2 = 1 mark)

3 An aqueous solution of a transition metal ion formed a green precipitate with both ammonia and sodium hydroxide solutions.

The green precipitate dissolved to form a blue solution with excess ammonia, but was insoluble in excess sodium hydroxide.

Which of these is the transition metal ion?

- A  $\text{Cr}^{3+}$
- B  $\text{Cu}^{2+}$
- C  $\text{Fe}^{2+}$
- D  $\text{Ni}^{2+}$

(Total for Question 3 = 1 mark)

DO NOT WRITE IN THIS AREA

DO NOT WRITE IN THIS AREA

DO NOT WRITE IN THIS AREA



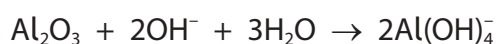
- 4 When aqueous sodium hydroxide is added to a solution containing manganese(II) ions, an off-white precipitate of manganese(II) hydroxide forms. The precipitate then gradually turns brown.

What type of reaction causes this precipitate to change colour?

- A Deprotonation
- B Disproportionation
- C Ligand exchange
- D Oxidation

(Total for Question 4 = 1 mark)

- 5 Aluminium oxide reacts as shown in the equations.

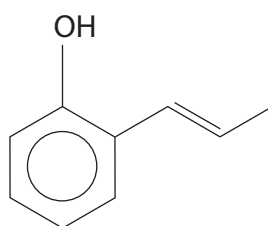


These two reactions show that aluminium oxide is

- A acidic.
- B amphoteric.
- C basic.
- D an oxidising agent.

(Total for Question 5 = 1 mark)

- 6 What is the molecular formula of the compound below?

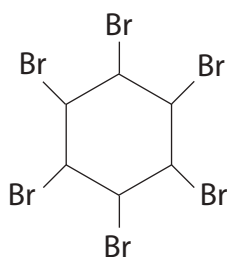


- A C<sub>9</sub>H<sub>9</sub>O
- B C<sub>9</sub>H<sub>10</sub>O
- C C<sub>9</sub>H<sub>11</sub>O
- D C<sub>9</sub>H<sub>12</sub>O

(Total for Question 6 = 1 mark)



- 7 When excess bromine reacts with benzene in the presence of ultraviolet radiation, the product below is formed.



The type of reaction occurring is

- A free radical addition.  
 B free radical substitution.  
 C electrophilic addition.  
 D electrophilic substitution.

(Total for Question 7 = 1 mark)

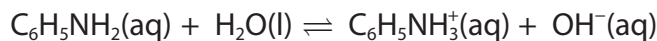
- 8 Phenol,  $C_6H_5OH$ , has a  $K_a$  value of  $1.28 \times 10^{-10} \text{ mol dm}^{-3}$ .

What is the pH of a  $0.10 \text{ mol dm}^{-3}$  solution of phenol?

- A 4.94  
 B 5.45  
 C 9.89  
 D 10.89

(Total for Question 8 = 1 mark)

- 9 Phenylamine,  $C_6H_5NH_2$ , is a weak base.



The equilibrium constant for this reaction is  $5.0 \times 10^{-10} \text{ mol dm}^{-3}$ .

What is the concentration of  $OH^-$  ions, in  $\text{mol dm}^{-3}$ , in a  $0.10 \text{ mol dm}^{-3}$  solution of phenylamine?

- A  $2.2 \times 10^{-5}$   
 B  $7.1 \times 10^{-6}$   
 C  $5.0 \times 10^{-10}$   
 D  $5.0 \times 10^{-11}$

(Total for Question 9 = 1 mark)

DO NOT WRITE IN THIS AREA

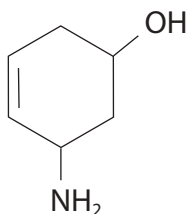
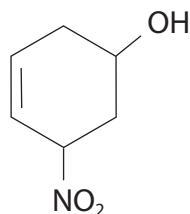
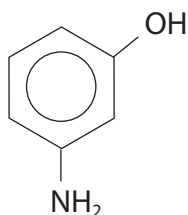
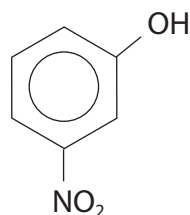
DO NOT WRITE IN THIS AREA

DO NOT WRITE IN THIS AREA



- 10 An organic compound **X** reacted with bromine water to give a white precipitate. **X** gave a deep blue solution with an aqueous solution containing  $\text{Cu}^{2+}$  ions.

Which of the following could be the structure of **X**?

 A

 B

 C

 D


(Total for Question 10 = 1 mark)

- 11 Which of these compounds **cannot** form an amide in a reaction with ethanoyl chloride?

 A  $\text{NH}_3$ 
 B  $\text{CH}_3\text{NH}_2$ 
 C  $\text{CH}_3\text{CH}_2\text{NHCH}_3$ 
 D  $\text{CH}_3\text{CH}_2\text{N}(\text{CH}_3)_2$ 

(Total for Question 11 = 1 mark)

- 12 What is the minimum volume, in  $\text{cm}^3$ , of oxygen needed for the complete combustion of  $10 \text{ cm}^3$  of hexane gas,  $\text{C}_6\text{H}_{14}(\text{g})$ ?

All gas volumes are measured at the same temperature and pressure.

 A 90

 B 95

 C 180

 D 190

(Total for Question 12 = 1 mark)



13 What mass of water in g is produced during the complete combustion of 0.002 mol of octane,  $C_8H_{18}$ ?

- A 0.036
- B 0.072
- C 0.324
- D 0.648

(Total for Question 13 = 1 mark)

14 Which is the most important advantage of combinatorial chemistry over traditional methods for developing pharmaceuticals?

- A Many more compounds can be made in a given time.
- B Only stereo-specific compounds are formed.
- C The compounds formed have fewer impurities.
- D The compounds formed have fewer side effects.

(Total for Question 14 = 1 mark)

15 Linalool is an organic liquid that is immiscible with water and can decompose below its boiling temperature. It is extracted from lavender flowers and stalks.

The lavender flowers and stalks are crushed and mixed with water.

Which is the correct order of practical techniques to extract linalool from this mixture?

- A refluxing, distilling, drying, decanting
- B steam distilling, purifying by washing, drying, decanting
- C steam distilling, using a separating funnel, drying, decanting
- D using a separating funnel, drying, decanting, distilling

(Total for Question 15 = 1 mark)

16 In a methanol-oxygen fuel cell, methanol is

- A oxidised at the anode.
- B oxidised at the cathode.
- C reduced at the anode.
- D reduced at the cathode.

(Total for Question 16 = 1 mark)

DO NOT WRITE IN THIS AREA

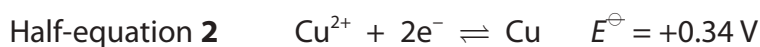
DO NOT WRITE IN THIS AREA

DO NOT WRITE IN THIS AREA



17 Copper(II) ions oxidise titanium(II) ions.

The relevant half-equations are



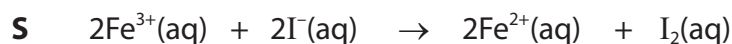
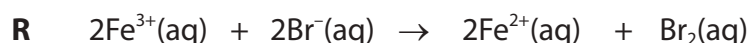
$E_{\text{cell}}^{\ominus}$  for the reaction = + 0.71 V.

The standard electrode potential for half-equation 1 is

- A -0.37 V
- B -1.05 V
- C +0.37 V
- D +1.05 V

(Total for Question 17 = 1 mark)

18 This question is about the following reactions.



Relevant standard electrode potentials are shown in the table.

Electrode reaction	$E^{\ominus}/\text{V}$
$\text{I}_2(\text{aq}) + 2\text{e}^{-} \rightleftharpoons 2\text{I}^{-}(\text{aq})$	+0.54
$2\text{Fe}^{3+}(\text{aq}) + 2\text{e}^{-} \rightleftharpoons 2\text{Fe}^{2+}(\text{aq})$	+0.77
$\text{Br}_2(\text{aq}) + 2\text{e}^{-} \rightleftharpoons 2\text{Br}^{-}(\text{aq})$	+1.09

Which reactions are thermodynamically feasible under standard conditions?

- A P and Q
- B P and S
- C Q and R
- D Q and S

(Total for Question 18 = 1 mark)



- 19 A titration experiment was used to find the percentage of iron in iron tablets. The volumes used and measurement uncertainty for each reading of the burette and pipette are shown.

Apparatus	Volume used / cm <sup>3</sup>	Measurement uncertainty / cm <sup>3</sup>
burette	21.80	±0.05
pipette	25.0	±0.06

What are the total percentage uncertainties, to 2 decimal places?

	Total percentage uncertainty on volume measured by burette	Total percentage uncertainty on volume measured by pipette
<input type="checkbox"/> A	0.23	0.24
<input type="checkbox"/> B	0.23	0.48
<input type="checkbox"/> C	0.46	0.24
<input type="checkbox"/> D	0.46	0.48

(Total for Question 19 = 1 mark)

- 20 Sulfuryl chloride, SO<sub>2</sub>Cl<sub>2</sub>, reacts with water to give a mixture of sulfuric acid, H<sub>2</sub>SO<sub>4</sub>, and hydrochloric acid, HCl.

How many moles of sodium hydroxide, NaOH, are needed to neutralise the solution formed by adding 1 mol of sulfuryl chloride to excess water?

- A 1
- B 2
- C 3
- D 4

(Total for Question 20 = 1 mark)

**TOTAL FOR SECTION A = 20 MARKS**

DO NOT WRITE IN THIS AREA

DO NOT WRITE IN THIS AREA

DO NOT WRITE IN THIS AREA





DO NOT WRITE IN THIS AREA

DO NOT WRITE IN THIS AREA

DO NOT WRITE IN THIS AREA

BLANK PAGE



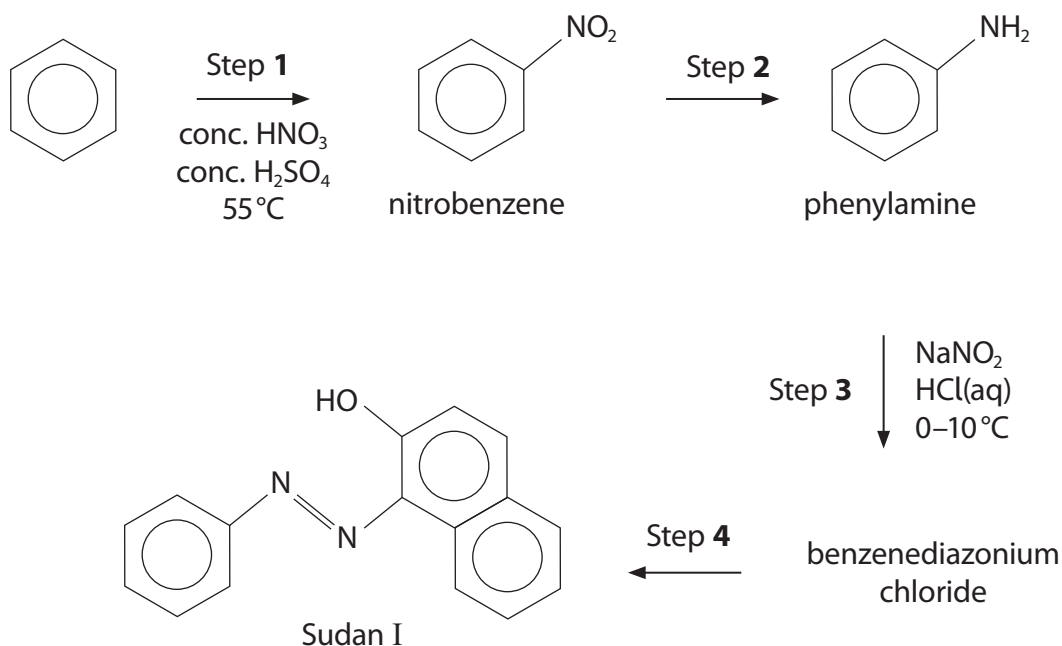
## SECTION B

Answer ALL the questions. Write your answers in the spaces provided.

21 Compounds derived from benzene have many uses, including as dyes and drugs.

- (a) Sudan I is an intense orange-red azo dye that is used to colour waxes, oils and polishes.

It can be prepared from benzene using the reaction scheme shown.



- (i) Give the mechanism of the reaction taking place in Step 1, including an equation for the formation of the electrophile.

(4)

DO NOT WRITE IN THIS AREA

DO NOT WRITE IN THIS AREA

DO NOT WRITE IN THIS AREA



(ii) Identify the reagents needed in Step 2.

(1)

(iii) Explain why, in Step 3, the temperature should not be higher than 10°C.

(1)

(iv) Draw the structure of benzenediazonium chloride, showing all the bonds in the side-chain and any charges.

(1)

(v) Draw the structure of the organic compound needed to produce Sudan I from benzenediazonium chloride in Step 4.

(1)

DO NOT WRITE IN THIS AREA

DO NOT WRITE IN THIS AREA

DO NOT WRITE IN THIS AREA



DO NOT WRITE IN THIS AREA

DO NOT WRITE IN THIS AREA

DO NOT WRITE IN THIS AREA

(b) Sudan IV is another azo dye.

The first step of a suggested synthesis of Sudan IV involved the preparation of methylbenzene from benzene.

Give the reagent and conditions to prepare methylbenzene from benzene.

(2)

.....

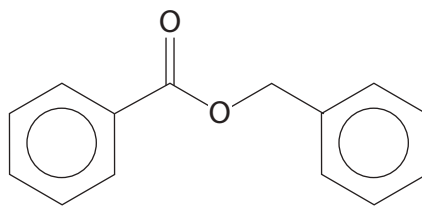
.....

.....

.....



\*(c) Benzyl benzoate is present in many asthma drugs.



benzyl benzoate

Outline how a chemist could synthesise a sample of benzyl benzoate in three or four steps, using benzaldehyde,  $C_6H_5CHO$ , as the **only** organic compound.

Include the reagents and conditions for the steps in the synthesis and draw the structures of the intermediates.

(5)

(Total for Question 21 = 15 marks)



P 4 8 3 7 3 A 0 1 3 3 2

22 The elements from scandium to zinc belong to the d-block. Most of these elements are transition elements.

(a) (i) Complete the electronic configurations of a scandium atom, a manganese(III) ion and an iron(II) ion.

(2)

	3d					4s
Sc [Ar]						
Mn <sup>3+</sup> [Ar]						
Fe <sup>2+</sup> [Ar]						

(ii) Scandium, iron and manganese are **d-block elements**, but only iron and manganese are **transition elements**.

Explain the meaning of these terms.

(2)

d-block elements

.....

.....

.....

.....

.....

transition elements

.....

.....

.....

.....

.....

DO NOT WRITE IN THIS AREA

DO NOT WRITE IN THIS AREA

DO NOT WRITE IN THIS AREA



(iii) Explain, in terms of electronic configurations, why  $\text{Fe}^{2+}$  ions are readily oxidised to  $\text{Fe}^{3+}$  ions but  $\text{Mn}^{2+}$  ions are not readily oxidised to  $\text{Mn}^{3+}$  ions.

(2)

(iv) Explain why the  $\text{Fe}^{2+}$  and  $\text{Fe}^{3+}$  ions have **different** colours in aqueous solution.

A detailed explanation of why transition metal ions are coloured is **not** required.

(2)

(b) The concentration of a solution of potassium manganate(VII),  $\text{KMnO}_4$ , can be found by titration with arsenic(III) oxide,  $\text{As}_2\text{O}_3$ .

In this reaction, arsenic(III) oxide is oxidised to arsenic(V) oxide,  $\text{As}_2\text{O}_5$ , and the mole ratio of  $\text{As}_2\text{O}_3$  to  $\text{MnO}_4^-$  is 5:4.

Deduce the final oxidation number of the manganese. Explain your reasoning.

(3)

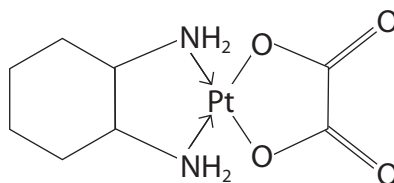
DO NOT WRITE IN THIS AREA

DO NOT WRITE IN THIS AREA

DO NOT WRITE IN THIS AREA



- (c) Oxaliplatin is a drug used for the treatment of cancer. It consists of a platinum **ion** linked to two different bidentate ligands. The complex can be represented by the structure shown.



- (i) State the meaning of the term **bidentate ligand**.

(1)

.....

.....

.....

.....

- (ii) Draw the structures of the two bidentate ligands in oxaliplatin.

(2)

- (iii) State the oxidation number of platinum in this complex.

(1)

.....

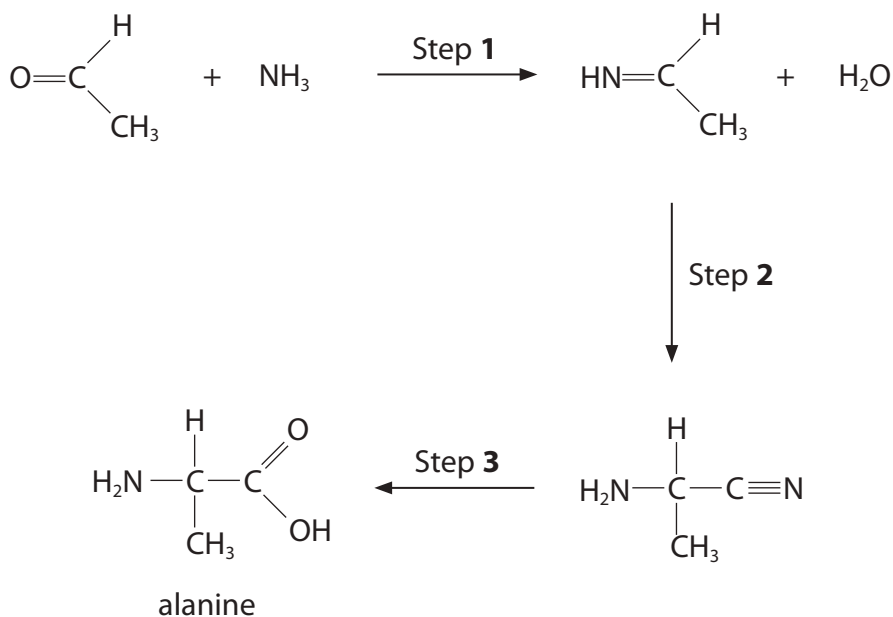
(Total for Question 22 = 15 marks)





23 Amino acids contain both amine and carboxylic acid functional groups.

(a) The amino acid alanine can be synthesised from ammonia and ethanal in three steps.



(i) Suggest the reagent for Step 2.

(1)

---

(ii) Identify, by name or formula, the reagent for Step 3.

(1)

---

(iii) Use your knowledge of amine chemistry to suggest the **displayed** formula of the organic product formed when alanine reacts with chloroethane.

(1)

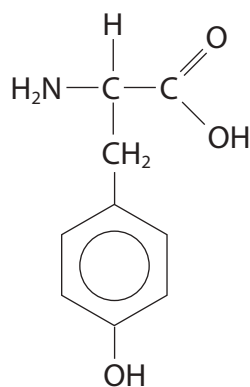
DO NOT WRITE IN THIS AREA

DO NOT WRITE IN THIS AREA

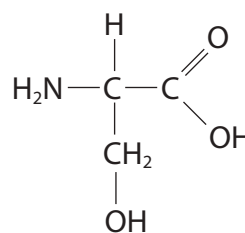
DO NOT WRITE IN THIS AREA



(b) Tyrosine and serine are amino acids that contain an additional OH group.



tyrosine



serine

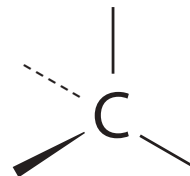
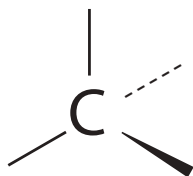
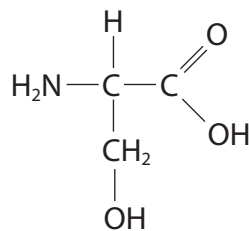
(i) Draw the structure of the zwitterion of tyrosine.

(1)



(ii) Complete the diagrams to show the two optical isomers of serine.

(2)



DO NOT WRITE IN THIS AREA

DO NOT WRITE IN THIS AREA

DO NOT WRITE IN THIS AREA

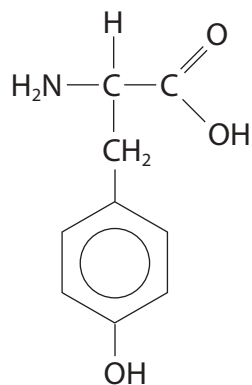


(iii) Tyrosine and serine can form different types of condensation polymers.

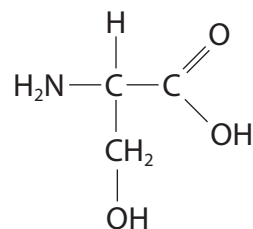
Draw **two** repeat units of the polyamide formed from tyrosine only and **two** repeat units of the polyester formed from serine only.

The polymer linkages must be **displayed**.

(4)



tyrosine



serine

**Polyamide** formed from tyrosine only

DO NOT WRITE IN THIS AREA

DO NOT WRITE IN THIS AREA

DO NOT WRITE IN THIS AREA



DO NOT WRITE IN THIS AREA

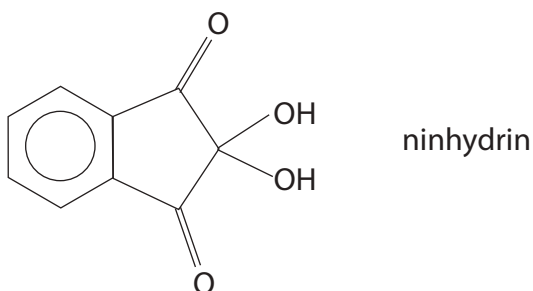
DO NOT WRITE IN THIS AREA

DO NOT WRITE IN THIS AREA

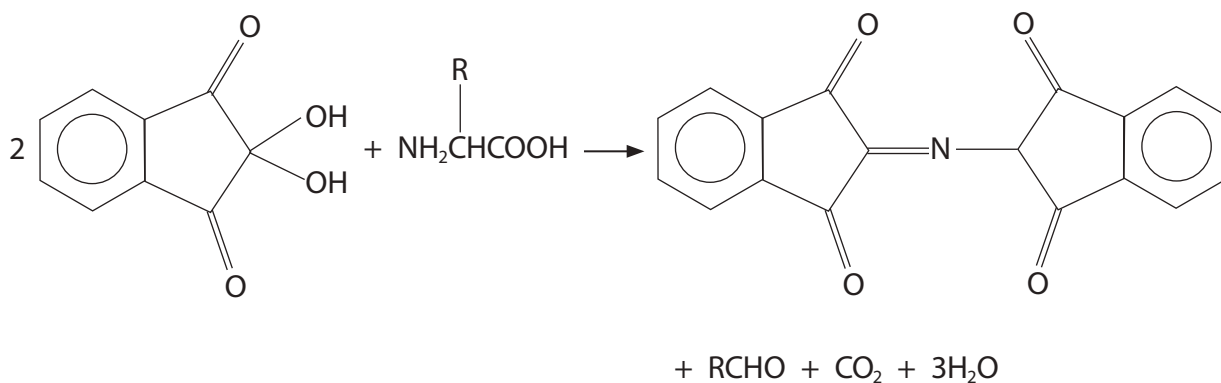
**Polyester** formed from serine only



(c) Amino acids are detected using ninhydrin.

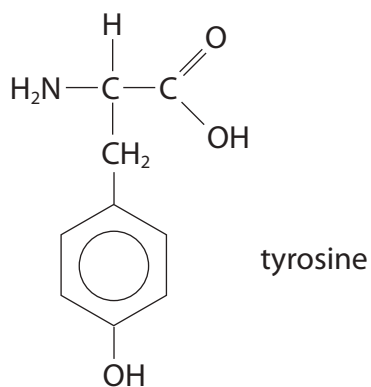


Ninhydrin reacts with most amino acids to give a purple colour. The reaction can be summarised as



(i) Draw the structure of the aldehyde formed when tyrosine reacts with ninhydrin.

(1)



- (ii) Draw the structure of the amino acid that reacts with ninhydrin to form 2-methylpropanal,  $(\text{CH}_3)_2\text{CHCHO}$ .

(1)

- (d) Explain whether or not tyrosine and serine can be distinguished by their infrared absorbance in the  $4000$  to  $2000\text{ cm}^{-1}$  range. Justify your answer by quoting information from the Data Booklet.

(1)

.....

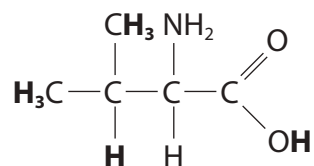
.....

.....

.....



(e) This question is about the high resolution proton nmr spectrum of the amino acid valine.



(i) State the total number of different proton environments in valine. (1)

(ii) Use the Data Booklet, and your knowledge of nmr spectra, to complete the table for the protons in valine shown in **bold** in the structure. (3)

Protons in valine	Chemical shift / ppm from TMS	Splitting pattern
<b>CH<sub>3</sub></b>	0.1–1.9	
<b>CH</b>	0.1–1.9	
<b>OH</b>		singlet

(Total for Question 23 = 17 marks)

TOTAL FOR SECTION B = 47 MARKS





DO NOT WRITE IN THIS AREA

DO NOT WRITE IN THIS AREA

DO NOT WRITE IN THIS AREA

BLANK PAGE



P 4 8 3 7 3 A 0 2 5 3 2

## SECTION C

Answer ALL the questions. Write your answers in the spaces provided.

24

**The +6 oxidation state**

There are many compounds that contain an element in the +6 oxidation state, when six of the element's electrons are used in bonding.

Similarities exist between sulfur(VI) compounds and chromium(VI) compounds. For example, sulfur forms sulfate(VI) ions,  $\text{SO}_4^{2-}$ , and disulfate(VI) ions,  $\text{S}_2\text{O}_7^{2-}$ , while chromium forms chromate(VI) ions,  $\text{CrO}_4^{2-}$ , and dichromate(VI) ions,  $\text{Cr}_2\text{O}_7^{2-}$ . The ions with corresponding formulae have the same shape.

Other transition metal compounds exist with the metal in oxidation state +6. Potassium manganate(VI),  $\text{K}_2\text{MnO}_4$ , can be prepared in alkaline solution but it readily disproportionates in neutral or acidic solution. Potassium ferrate(VI),  $\text{K}_2\text{FeO}_4$ , is obtained by heating iron filings with potassium nitrate and then pouring the cooled mixture into water.

- (a) (i) Draw a dot and cross diagram for a sulfate(VI) ion,  $\text{SO}_4^{2-}$ .

(2)

- (ii) State the shape of a sulfate(VI) ion,  $\text{SO}_4^{2-}$ .

(1)

DO NOT WRITE IN THIS AREA

DO NOT WRITE IN THIS AREA

DO NOT WRITE IN THIS AREA



(iii) Many sulfate(VI) compounds are soluble in water. However, lead(II) sulfate(VI) is sparingly soluble.

0.0500 g of lead(II) sulfate(VI),  $\text{PbSO}_4$ , was mixed with  $250.0 \text{ cm}^3$  of water. Calculate the mass of undissolved lead(II) sulfate(VI) in this mixture.

Data:

solubility of lead(II) sulfate(VI) =  $1.26 \times 10^{-4} \text{ mol dm}^{-3}$

molar mass of  $\text{PbSO}_4 = 303.3 \text{ g mol}^{-1}$

(2)

(b) (i) Sodium disulfate(VI) decomposes on heating to form only two products: sodium sulfate(VI) and an oxide of sulfur in oxidation state +6.

Write the equation for this decomposition. State symbols are not required.

(1)

(ii) Ammonium dichromate(VI) decomposes on heating to form chromium(III) oxide, nitrogen and water.

Write the equation for this decomposition. State symbols are not required.

(1)



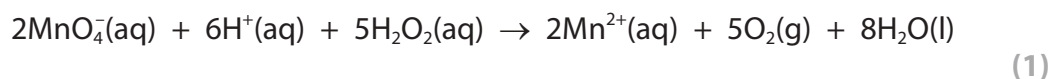
(c) Use these standard electrode potentials to answer the following questions.

Electrode reaction	$E^\ominus/V$
$\text{SO}_4^{2-}(\text{aq}) + \text{H}_2\text{O}(\text{l}) + 2\text{e}^- \rightleftharpoons \text{SO}_3^{2-}(\text{aq}) + 2\text{OH}^-(\text{aq})$	-0.93
$\text{CrO}_4^{2-}(\text{aq}) +$	
$\text{MnO}_4^-(\text{aq}) + \text{e}^- \rightleftharpoons \text{MnO}_4^{2-}(\text{aq})$	+0.56
$\text{MnO}_4^{2-}(\text{aq}) + 2\text{H}_2\text{O}(\text{l}) + 2\text{e}^- \rightleftharpoons \text{MnO}_2(\text{s}) + 4\text{OH}^-(\text{aq})$	+0.59
$2\text{H}^+(\text{aq}) + \text{O}_2(\text{g}) + 2\text{e}^- \rightleftharpoons \text{H}_2\text{O}_2(\text{aq})$	+0.68
$\text{Cr}_2\text{O}_7^{2-}(\text{aq}) + 14\text{H}^+(\text{aq}) + 6\text{e}^- \rightleftharpoons 2\text{Cr}^{3+}(\text{aq}) + 7\text{H}_2\text{O}(\text{l})$	+1.33
$\text{MnO}_4^-(\text{aq}) + 8\text{H}^+(\text{aq}) + 5\text{e}^- \rightleftharpoons \text{Mn}^{2+}(\text{aq}) + 4\text{H}_2\text{O}(\text{l})$	+1.51
$\text{H}_2\text{O}_2(\text{aq}) + 2\text{H}^+(\text{aq}) + 2\text{e}^- \rightleftharpoons 2\text{H}_2\text{O}(\text{l})$	+1.77
$\text{FeO}_4^{2-}(\text{aq}) + 8\text{H}^+(\text{aq}) + 3\text{e}^- \rightleftharpoons \text{Fe}^{3+} + 4\text{H}_2\text{O}(\text{l})$	+2.20

- (i) Complete the table using information from page 14 of the Data Booklet. (1)
- (ii) Give the formula of the species which, under standard conditions, is the strongest oxidising agent. (1)
- 
- (iii) Write the equation for the disproportionation of the manganate(VI) ion. Include state symbols. (1)



(iv) Calculate the standard cell potential,  $E_{\text{cell}}^{\ominus}$ , for the following reaction.



(v) Draw a fully labelled diagram of the apparatus you would use to determine the standard electrode potential of the dichromate(VI) / chromium(III) electrode at 298 K, using a standard hydrogen electrode.

(5)

DO NOT WRITE IN THIS AREA

DO NOT WRITE IN THIS AREA

DO NOT WRITE IN THIS AREA



- (d) The mass of ethanol in  $5.00 \text{ cm}^3$  of white wine is found by oxidising the ethanol to ethanoic acid using acidified potassium dichromate(VI) solution. The excess acidified potassium dichromate(VI) solution is then determined.

Step 1  $5.00 \text{ cm}^3$  of white wine was diluted to  $100.0 \text{ cm}^3$  with distilled water.

Step 2  $10.0 \text{ cm}^3$  of acidified potassium dichromate(VI) solution, of concentration  $0.0150 \text{ mol dm}^{-3}$ , was placed in a conical flask with  $1.00 \text{ cm}^3$  of the diluted white wine and left until all the ethanol had been completely oxidised.


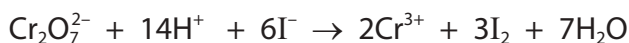
Step 3  $10 \text{ cm}^3$  (an excess) of potassium iodide solution was added to the flask to react with the remaining potassium dichromate(VI) solution.

Step 4 The iodine produced was titrated with  $0.0300 \text{ mol dm}^{-3}$  sodium thiosulfate solution.

Step 5 The procedure was repeated twice more.

The mean titre of sodium thiosulfate solution was  $9.20 \text{ cm}^3$ .

The equations for the reactions taking place are



- (i) Use the equations to determine the mole ratio of  $\text{S}_2\text{O}_3^{2-}$  to  $\text{Cr}_2\text{O}_7^{2-}$  in this series of reactions.

(1)



\*(ii) Calculate the mass of ethanol in  $5.00 \text{ cm}^3$  of the original white wine.

(6)

DO NOT WRITE IN THIS AREA

DO NOT WRITE IN THIS AREA

DO NOT WRITE IN THIS AREA

(Total for Question 24 = 23 marks)

TOTAL FOR SECTION C = 23 MARKS  
TOTAL FOR PAPER = 90 MARKS



# The Periodic Table of Elements

1	2	3	4	5	6	7	0 (8)										
(1) 6.9 <b>Li</b> lithium 3	(2) 9.0 <b>Be</b> beryllium 4	(3) 45.0 <b>Sc</b> scandium 21	(4) 47.9 <b>Ti</b> titanium 22	(5) 50.9 <b>V</b> vanadium 23	(6) 52.0 <b>Cr</b> chromium 24	(7) 54.9 <b>Mn</b> manganese 25	(8) 55.8 <b>Fe</b> iron 26	(9) 58.9 <b>Co</b> cobalt 27	(10) 58.7 <b>Ni</b> nickel 28	(11) 63.5 <b>Cu</b> copper 29	(12) 65.4 <b>Zn</b> zinc 30	(13) 10.8 <b>B</b> boron 5	(14) 12.0 <b>C</b> carbon 6	(15) 14.0 <b>N</b> nitrogen 7	(16) 16.0 <b>O</b> oxygen 8	(17) 19.0 <b>F</b> fluorine 9	(18) 4.0 <b>He</b> helium 2
23.0 <b>Na</b> sodium 11	24.3 <b>Mg</b> magnesium 12	39.1 <b>K</b> potassium 19	40.1 <b>Ca</b> calcium 20	50.9 <b>V</b> vanadium 23	52.0 <b>Cr</b> chromium 24	54.9 <b>Mn</b> manganese 25	55.8 <b>Fe</b> iron 26	58.9 <b>Co</b> cobalt 27	58.7 <b>Ni</b> nickel 28	63.5 <b>Cu</b> copper 29	65.4 <b>Zn</b> zinc 30	27.0 <b>Al</b> aluminium 13	28.1 <b>Si</b> silicon 14	31.0 <b>P</b> phosphorus 15	32.1 <b>S</b> sulfur 16	35.5 <b>Cl</b> chlorine 17	39.9 <b>Ar</b> argon 18
85.5 <b>Rb</b> rubidium 37	87.6 <b>Sr</b> strontium 38	88.9 <b>Y</b> yttrium 39	91.2 <b>Zr</b> zirconium 40	92.9 <b>Nb</b> niobium 41	95.9 <b>Mo</b> molybdenum 42	[98] <b>Tc</b> technetium 43	101.1 <b>Ru</b> ruthenium 44	102.9 <b>Rh</b> rhodium 45	106.4 <b>Pd</b> palladium 46	107.9 <b>Ag</b> silver 47	112.4 <b>Cd</b> cadmium 48	114.8 <b>In</b> indium 49	118.7 <b>Sn</b> tin 50	121.8 <b>Sb</b> antimony 51	127.6 <b>Te</b> tellurium 52	126.9 <b>I</b> iodine 53	131.3 <b>Xe</b> xenon 54
132.9 <b>Cs</b> caesium 55	137.3 <b>Ba</b> barium 56	138.9 <b>La*</b> lanthanum 57	178.5 <b>Hf</b> hafnium 72	180.9 <b>Ta</b> tantalum 73	183.8 <b>W</b> tungsten 74	186.2 <b>Re</b> rhenium 75	190.2 <b>Os</b> osmium 76	192.2 <b>Ir</b> iridium 77	195.1 <b>Pt</b> platinum 78	197.0 <b>Au</b> gold 79	200.6 <b>Hg</b> mercury 80	204.4 <b>Tl</b> thallium 81	207.2 <b>Pb</b> lead 82	209.0 <b>Bi</b> bismuth 83	[209] <b>Po</b> polonium 84	[210] <b>At</b> astatine 85	[222] <b>Rn</b> radon 86
[223] <b>Fr</b> francium 87	[226] <b>Ra</b> radium 88	[227] <b>Ac*</b> actinium 89	[261] <b>Rf</b> rutherfordium 104	[262] <b>Db</b> dubnium 105	[266] <b>Sg</b> seaborgium 106	[264] <b>Bh</b> bohrium 107	[277] <b>Hs</b> hassium 108	[268] <b>Mt</b> meitnerium 109	[271] <b>Ds</b> darmstadtium 110	[272] <b>Rg</b> roentgenium 111	Elements with atomic numbers 112-116 have been reported but not fully authenticated						
* Lanthanide series		140 <b>Ce</b> cerium 58	141 <b>Pr</b> praseodymium 59	144 <b>Nd</b> neodymium 60	147 <b>Pm</b> promethium 61	150 <b>Sm</b> samarium 62	152 <b>Eu</b> europium 63	157 <b>Gd</b> gadolinium 64	159 <b>Tb</b> terbium 65	163 <b>Dy</b> dysprosium 66	165 <b>Ho</b> holmium 67	167 <b>Er</b> erbium 68	169 <b>Tm</b> thulium 69	173 <b>Yb</b> ytterbium 70	175 <b>Lu</b> lutetium 71		
* Actinide series		232 <b>Th</b> thorium 90	[231] <b>Pa</b> protactinium 91	238 <b>U</b> uranium 92	[237] <b>Np</b> neptunium 93	[242] <b>Pu</b> plutonium 94	[243] <b>Am</b> americium 95	[247] <b>Cm</b> curium 96	[245] <b>Bk</b> berkelium 97	[251] <b>Cf</b> californium 98	[254] <b>Es</b> einsteinium 99	[253] <b>Fm</b> fermium 100	[256] <b>Md</b> mendelevium 101	[254] <b>No</b> nobelium 102	[257] <b>Lr</b> lawrencium 103		

1.0  
**H**  
hydrogen  
1

**Key**  
relative atomic mass  
atomic symbol  
name  
atomic (proton) number

DO NOT WRITE IN THIS AREA

DO NOT WRITE IN THIS AREA

DO NOT WRITE IN THIS AREA

