

Write your name here

Surname

Other names

Pearson Edexcel
International
Advanced Level

Centre Number

--	--	--	--	--

Candidate Number

--	--	--	--	--

Core Mathematics C12

Advanced Subsidiary

Monday 19 May 2014 – Morning

Time: 2 hours 30 minutes

Paper Reference

WMA01/01**You must have:**

Mathematical Formulae and Statistical Tables (Blue)

Total Marks

Candidates may use any calculator allowed by the regulations of the Joint Council for Qualifications. Calculators must not have the facility for symbolic algebra manipulation, differentiation and integration, or have retrievable mathematical formulae stored in them.

Instructions

- Use **black** ink or ball-point pen.
- If pencil is used for diagrams/sketches/graphs it must be dark (HB or B). Coloured pencils and highlighter pens must not be used.
- **Fill in the boxes** at the top of this page with your name, centre number and candidate number.
- Answer **all** questions and ensure that your answers to parts of questions are clearly labelled.
- Answer the questions in the spaces provided
– *there may be more space than you need.*
- You should show sufficient working to make your methods clear. Answers without working may not gain full credit.
- When a calculator is used, the answer should be given to an appropriate degree of accuracy.

Information

- The total mark for this paper is 125.
- The marks for **each** question are shown in brackets
– *use this as a guide as to how much time to spend on each question.*

Advice

- Read each question carefully before you start to answer it.
- Try to answer every question.
- Check your answers if you have time at the end.

Turn over ►

P44968A

©2014 Pearson Education Ltd.

5/5/5/1/1/



PEARSON

1.

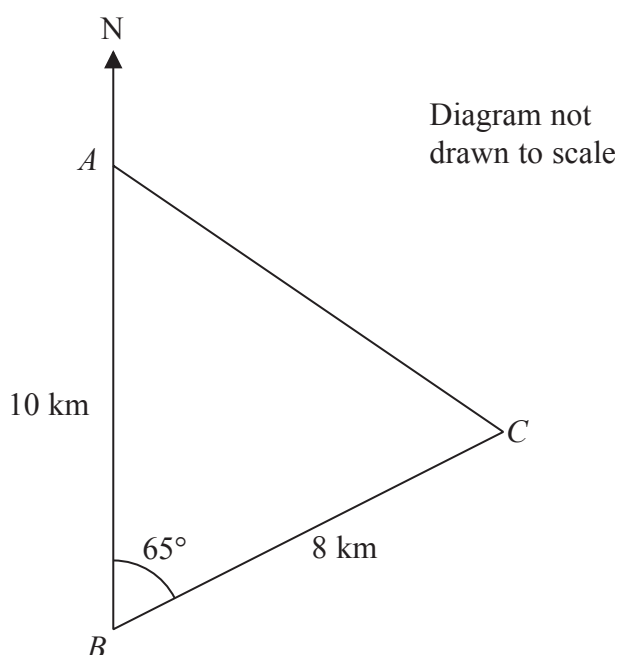


Figure 1

Figure 1 shows the position of three stationary fishing boats A , B and C , which are assumed to be in the same horizontal plane.

Boat A is 10 km due north of boat B .

Boat *C* is 8 km on a bearing of 065° from boat *B*.

- (a) Find the distance of boat C from boat A , giving your answer to the nearest 10 metres.

(3)

- (b) Find the bearing of boat C from boat A , giving your answer to one decimal place.

(3)



Leave
blank

This image shows a full page of blank, lined paper. It features approximately 20 horizontal blue or grey lines spaced evenly apart, typical of notebook paper. The lines extend across the entire width of the page, leaving small margins at the top and bottom. There are no vertical lines, text, or other markings on the page.

(Total 6 marks)

Q1



Leave
blank

[illegible]

(Total 4 marks)

Q2



Leave
blank

(a) $4^a = 20$

(2)

(b) $3 + 2\log_2 b = \log_2(30b)$

(5)

(Solutions based entirely on graphical or numerical methods are not acceptable.)



Q3

1

This image shows a single sheet of white paper with horizontal ruling lines. The lines are evenly spaced and run across the width of the page. There are no margins, text, or other markings on the paper.

(Total 7 marks)



4.

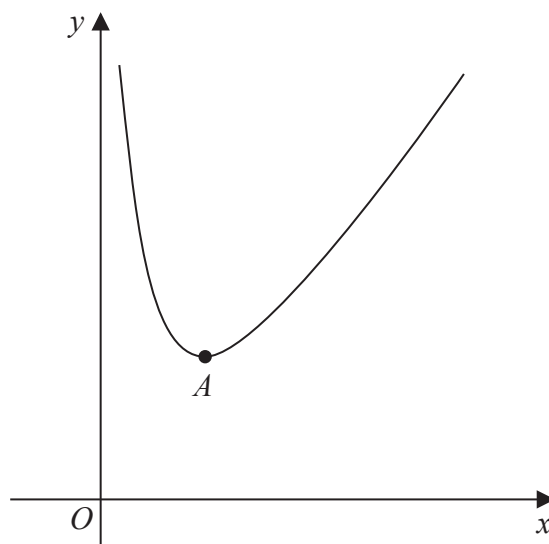


Figure 2

Figure 2 shows a sketch of part of the curve with equation $y = f(x)$ where

$$f(x) = x^2 + \frac{16}{x}, \quad x > 0$$

The curve has a minimum turning point at A .

(a) Find $f'(x)$.

(2)

(b) Hence find the coordinates of A .

(4)

(c) Use your answer to part (b) to write down the turning point of the curve with equation

(i) $y = f(x + 1)$,

(ii) $y = \frac{1}{2}f(x)$.

(2)



Leave
blank

[illegible]

Leave
blank

[illegible]

(Total 8 marks)

Q4



Leave
blank

A Cartesian coordinate system is shown with a horizontal x-axis and a vertical y-axis. The origin is labeled O . Three points are plotted and labeled:

- Point P is located in the second quadrant at coordinates $(-1, 4)$.
- Point Q is located in the first quadrant at coordinates $(4, 7)$.
- Point R is located in the fourth quadrant at coordinates $(p, -3)$.

Diagram not
drawn to scale

Figure 3

Figure 3 shows the points P , Q and R .

Points P and Q have coordinates $(-1, 4)$ and $(4, 7)$ respectively.

- (a) Find an equation for the straight line passing through points P and Q .

Give your answer in the form $ax + by + c = 0$, where a , b and c are integers.

(4)

The point R has coordinates $(p, -3)$, where p is a positive constant.

Given that angle $QPR = 90^\circ$,

- (b) find the value of p .

(3)



Leave
blank

Question 5 continued

Lined area for writing the answer to Question 5.



Q5

(Total 7 marks)





Leave
blank

[illegible]

(Total 7 marks)

Q6



Leave
blank

- Given that

$$f'(x) = \frac{4}{x^3} + 2x - 1$$

find the value of $f(1)$.

(5)

- (ii) Given that

$$\int_1^4 (3\sqrt{x} + A) \, dx = 21$$

find the exact value of the constant A .

(5)





Leave
blank

This image shows a full page of blank, lined paper. It features approximately 28 horizontal grey lines spaced evenly apart, typical of standard notebook paper. The lines extend across the entire width of the page, leaving small margins at the top and bottom. There are no vertical lines, text, or other markings present.

Leave
blank

[illegible]

Q7

Leave
blank

$$1 + 12x + 70x^2 + \dots$$

(a) show that $nb = 12$

(1)

(b) find the values of the constants b and n .

(6)





Leave
blank

Leave
blank

[illegible]

(Total 7 marks)

Q8



9. (i) Find the value of $\sum_{r=1}^{20} (3 + 5r)$ (3)

(ii) Given that $\sum_{r=0}^{\infty} \frac{a}{4^r} = 16$, find the value of the constant a . (4)

Leave
blank

This image shows a full page of blank, lined paper. It features approximately 28 horizontal grey lines spaced evenly apart, typical of notebook paper. The lines extend across the entire width of the page, leaving small margins at the top and bottom. There are no vertical lines, text, or other markings on the page.

(Total 7 marks)

Q9



Leave
blank

$$kx^2 + 4x + k = 2, \text{ where } k \text{ is a constant,}$$

has two distinct real solutions for x .

(a) Show that k satisfies

$$k^2 - 2k - 4 < 0 \quad (4)$$

(b) Hence find the set of all possible values of k . (3)



Leave
blank

Question 10 continued

Q10

(Total 7 marks)



11.

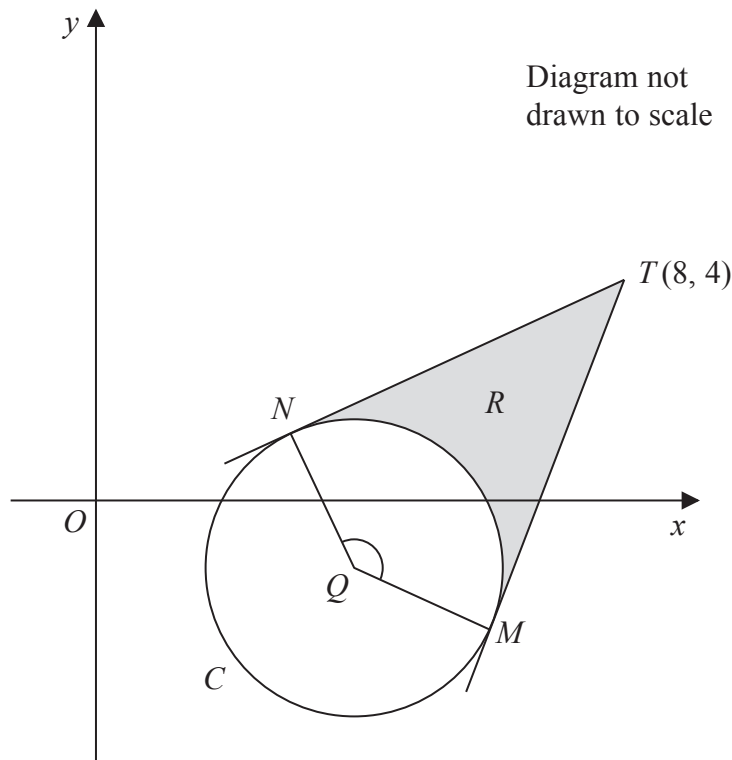


Figure 4

Figure 4 shows a sketch of the circle C with centre Q and equation

$$x^2 + y^2 - 6x + 2y + 5 = 0$$

(a) Find

- (i) the coordinates of Q ,
- (ii) the exact value of the radius of C .

(5)

The tangents to C from the point $T(8, 4)$ meet C at the points M and N , as shown in Figure 4.

(b) Show that the obtuse angle MQN is 2.498 radians to 3 decimal places.

(5)

The region R , shown shaded in Figure 4, is bounded by the tangent TN , the minor arc NM , and the tangent MT .

(c) Find the area of region R .

(5)





This image shows a single sheet of white paper with horizontal ruling lines. The lines are evenly spaced and run across the width of the page. There are no margins, text, or other markings on the paper.

Leave
blank

This image shows a full page of blank, lined paper. It features approximately 28 horizontal grey lines spaced evenly apart, typical of notebook paper. The lines extend across the entire width of the page, leaving small margins at the top and bottom. There are no vertical lines, text, or other markings on the page.

Q11



12.

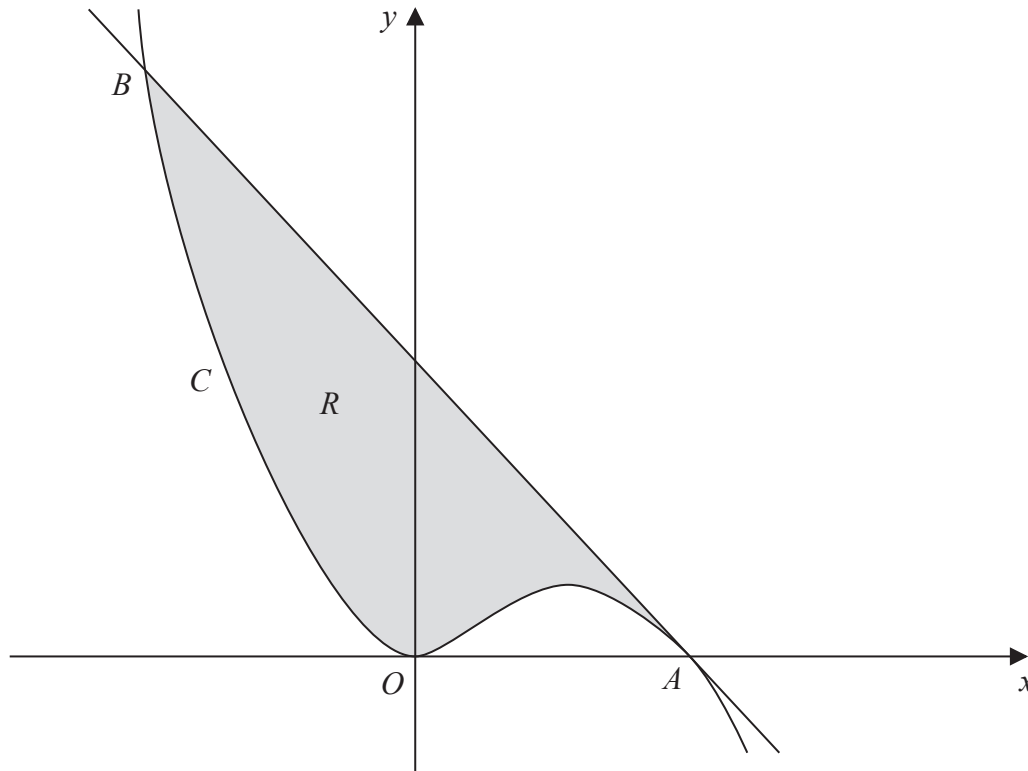


Figure 5

Figure 5 shows a sketch of part of the curve C with equation $y = x^2 - \frac{1}{3}x^3$

C touches the x -axis at the origin and cuts the x -axis at the point A .

(a) Show that the coordinates of A are $(3, 0)$.

(1)

(b) Show that the equation of the tangent to C at the point A is $y = -3x + 9$

(5)

The tangent to C at A meets C again at the point B , as shown in Figure 5.

(c) Use algebra to find the x coordinate of B .

(4)

The region R , shown shaded in Figure 5, is bounded by the curve C and the tangent to C at A .

(d) Find, by using calculus, the area of region R .

(Solutions based entirely on graphical or numerical methods are not acceptable.)

(5)





Leave
blank

[illegible]

(Total 15 marks)

Q12



This image shows a single sheet of white paper with horizontal ruling lines. The lines are evenly spaced and run across the width of the page. There are no margins, text, or other markings on the paper.



Leave
blank

14.

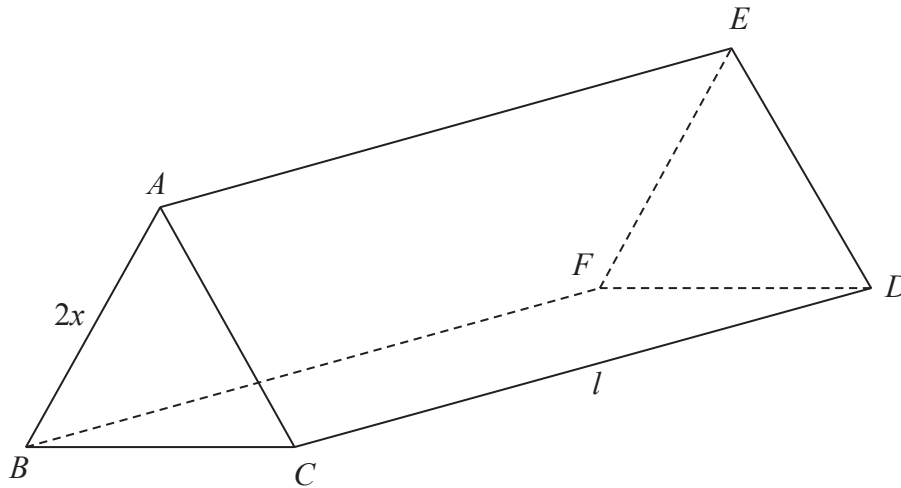


Figure 6

Figure 6 shows a solid triangular prism $ABCDEF$ in which $AB = 2x$ cm and $CD = l$ cm.

The cross section ABC is an equilateral triangle.

The rectangle $BCDF$ is horizontal and the triangles ABC and DEF are vertical.

The total surface area of the prism is S cm² and the volume of the prism is V cm³.

(a) Show that $S = 2x^2\sqrt{3} + 6xl$

(3)

Given that $S = 960$,

(b) show that $V = 160x\sqrt{3} - x^3$

(5)

(c) Use calculus to find the maximum value of V , giving your answer to the nearest integer.

(5)

(d) Justify that the value of V found in part (c) is a maximum.

(2)



Leave
blank

Leave
blank

[illegible]

Leave
blank

Question 14 continued

Q14

(Total 15 marks)

TOTAL FOR PAPER: 125 MARKS

END

